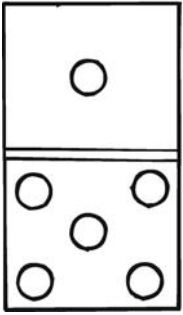


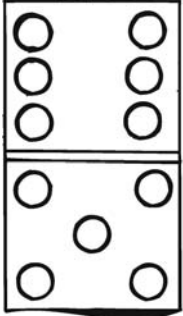
Make a sum from these domino tiles.

© www.lessonsense.com

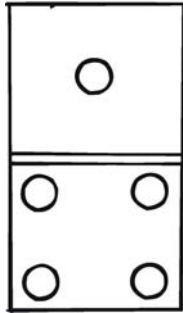
Check the first box for an example and fill in the right answer



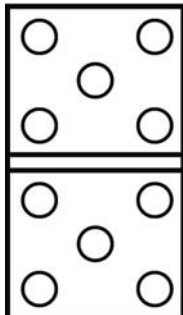
$$1 + 5 =$$



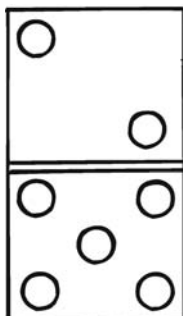
Blank box for writing the sum.



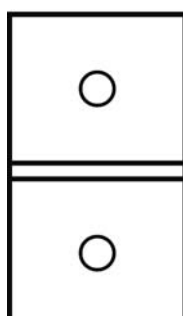
Blank box for writing the sum.



Blank box for writing the sum.



Blank box for writing the sum.



Blank box for writing the sum.